



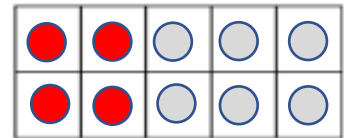
| | | | |
|---------------|--|--|--|
| <i>cities</i> | | | |
| <i>water</i> | | | |
| <i>sorry</i> | | | |
| <i>bread</i> | | | |
| <i>reply</i> | | | |
| <i>basic</i> | | | |
| <i>please</i> | | | |
| <i>action</i> | | | |
| <i>friend</i> | | | |

Write a sentence using at least two of the words.

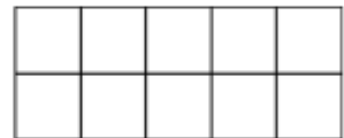
Maths

Complete the number sentences. You can use the ten frames to help.

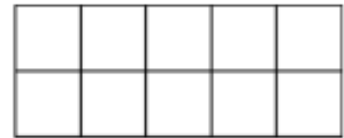
1. $\boxed{4} + \boxed{6} = \boxed{\quad}$



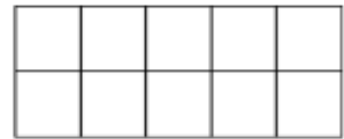
2. $\boxed{\quad} + \boxed{2} = \boxed{10}$



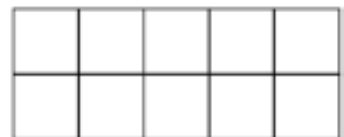
3. $\boxed{10} = \boxed{7} + \boxed{\quad}$



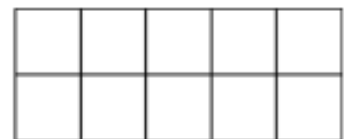
4. $\boxed{\quad} + \boxed{1} = \boxed{10}$



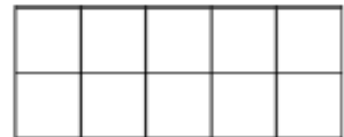
5. $\boxed{10} = \boxed{\quad} + \boxed{5}$



6. $\boxed{10} = \boxed{8} + \boxed{\quad}$



7. $\boxed{\quad} + \boxed{0} = \boxed{10}$



8. $\boxed{10} = \boxed{1} + \boxed{\quad}$

